



- Napisz znaki dodawania i równości po śladzie i samodzielnie.



- Pokoloruj figury tak, by rysunek zgadzał się z podpisem.



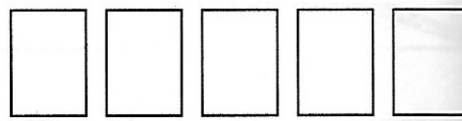
$$1 + 4$$



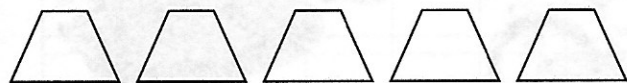
$$2 + 3$$



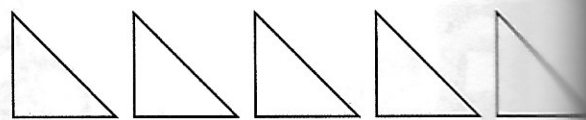
$$3 + 2$$




$$4 + 1$$



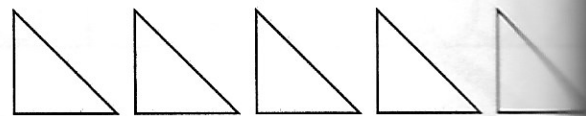
$$1 + 2 + 2$$



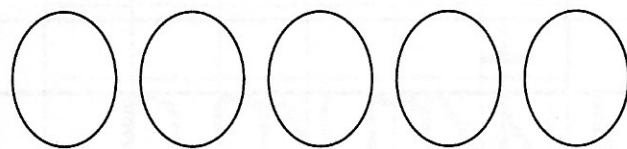
$$3 + 1 + 1$$



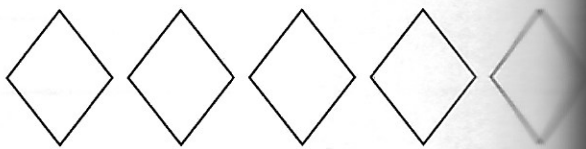
$$1 + 1 + 1 + 2$$



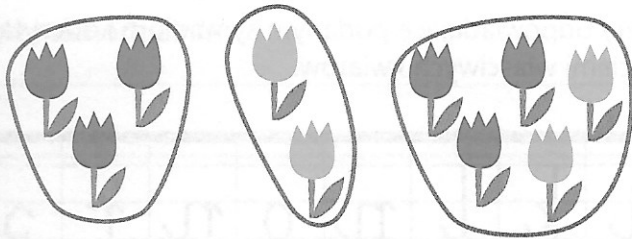
$$2 + 2 + 1$$




$$1 + 1 + 1 + 1 + 1$$



$$5 + 0$$



3 i 2 to 5  
3 + 2 = 5



• Policz tulipany. Wpisz liczby w odpowiednie kratki. Oblicz i wpisz wynik obliczenia.

